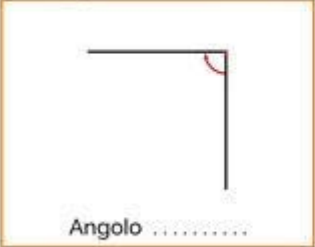



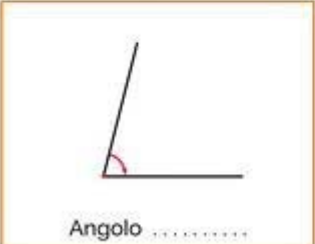
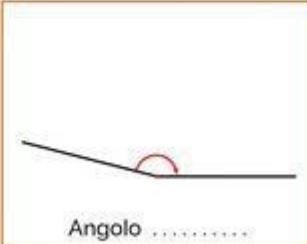


## Schede didattiche sugli angoli

- Scrivi in ogni riquadro se si tratta di un angolo retto, acuto, ottuso, piatto, giro o nullo.

 <p>Angolo .....</p>	 <p>Angolo .....</p>
 <p>Angolo .....</p>	 <p>Angolo .....</p>
 <p>Angolo .....</p>	 <p>Angolo .....</p>

© Pianetabambini.it

Scrivi, inoltre, l'ampiezza di ognuno di essi

Angolo retto =  $90^\circ$  ... ecc.